

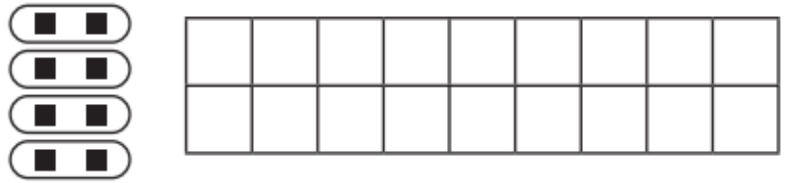
Using Arrays

Complete the arrays below:

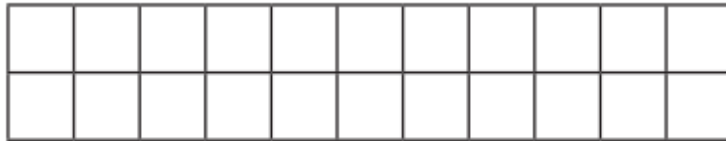
$2 \times 2 = \underline{\hspace{2cm}}$



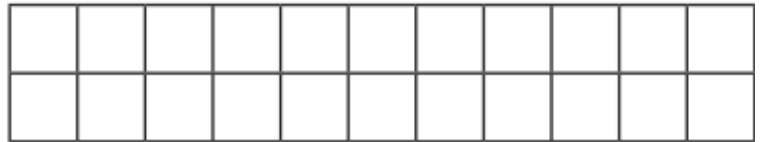
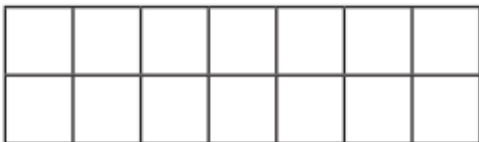
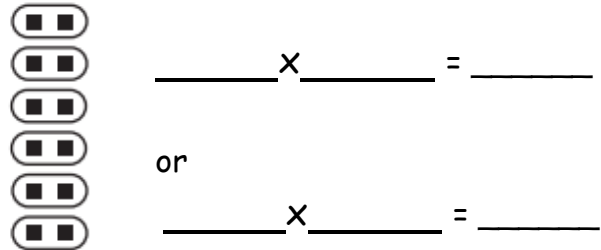
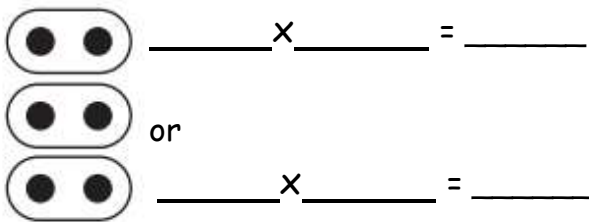
$4 \times 2 = \underline{\hspace{2cm}}$ or $2 \times 4 = \underline{\hspace{2cm}}$




$5 \times 2 = \underline{\hspace{2cm}}$ or $\underline{\hspace{2cm}} \times \underline{\hspace{2cm}} = \underline{\hspace{2cm}}$



Write the multiplication sentence and complete the array below:



Write a multiplication sentence for each array.



$3 \times 4 = 12$ or $4 \times 3 = 12$

