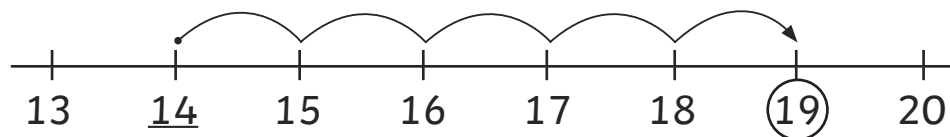


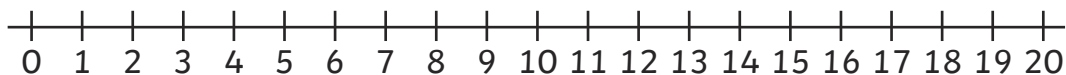
Addition within 20 with a Number Line

Example:

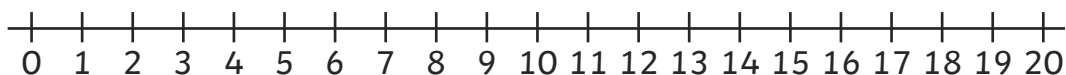
$$\underline{14} + 5 = \textcircled{19}$$



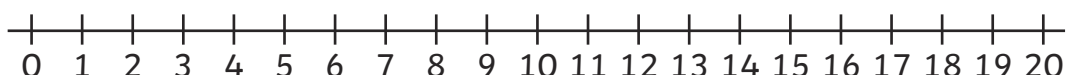
$$10 + 4 = \underline{\quad}$$



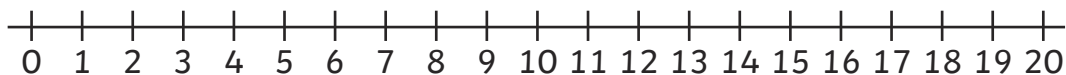
$$11 + 4 = \underline{\quad}$$



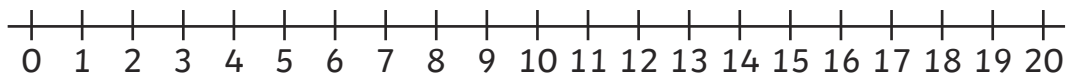
$$12 + 5 = \underline{\quad}$$



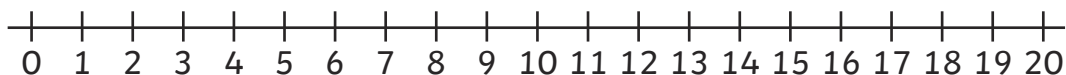
$$13 + 6 = \underline{\quad}$$



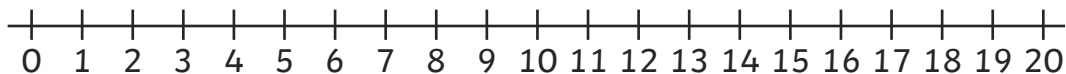
$$14 + \underline{\quad} = 18$$



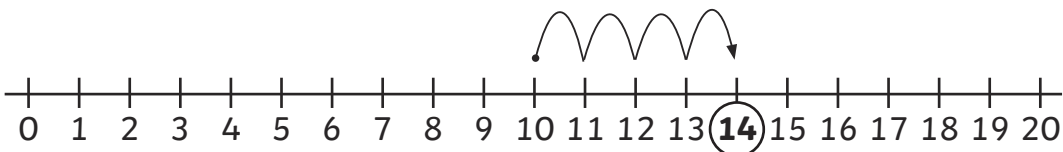
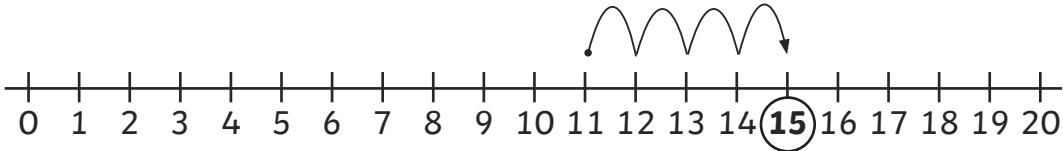
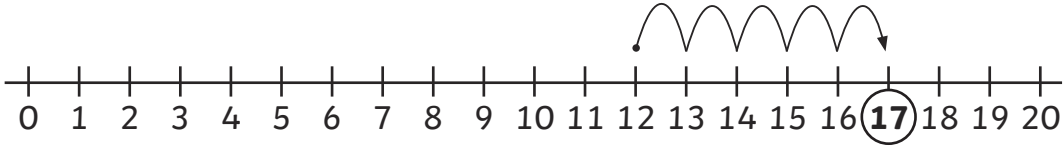
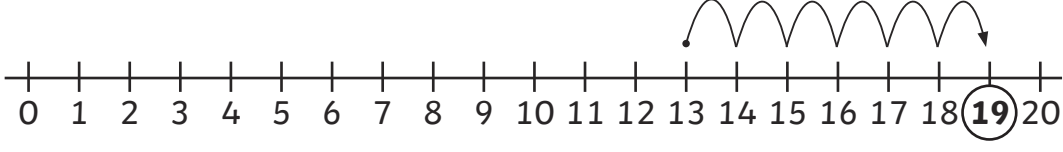
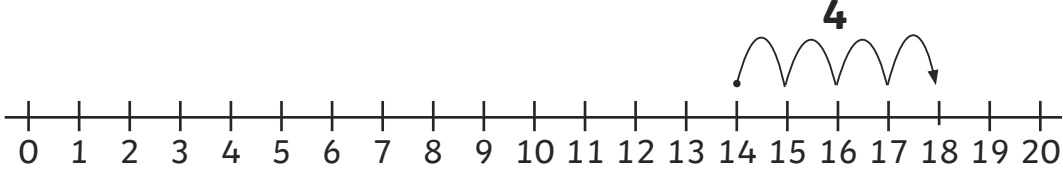
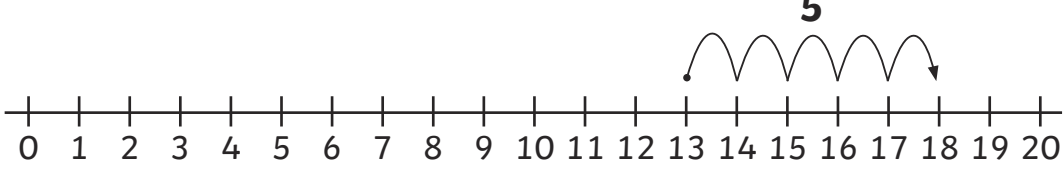
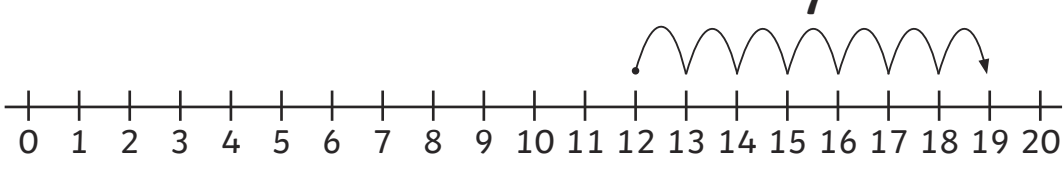
$$13 + \underline{\quad} = 18$$



$$12 + \underline{\quad} = 19$$



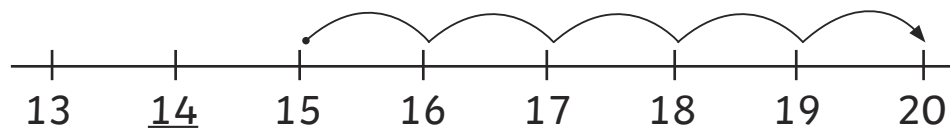
Addition within 20 with a Number Line **Answers**

$10 + 4 = \underline{14}$	
$11 + 4 = \underline{15}$	
$12 + 5 = \underline{17}$	
$13 + 6 = \underline{19}$	
$14 + \underline{4} = 18$	
$13 + \underline{5} = 18$	
$12 + \underline{7} = 19$	

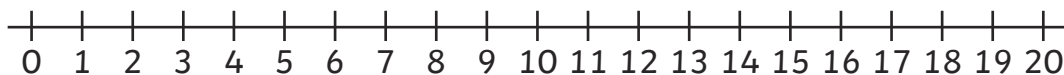
Addition within 20 with a Number Line

Example:

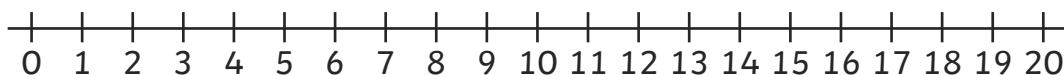
$$\underline{14} + 5 = \textcircled{19}$$



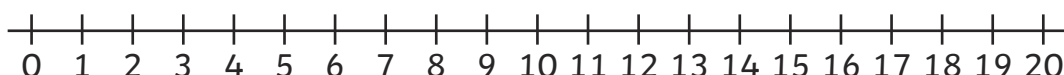
$$8 + 9 = \underline{\quad}$$



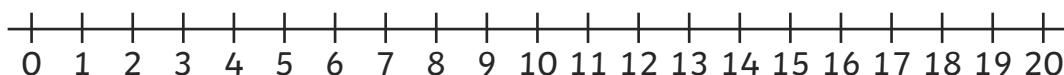
$$9 + 9 = \underline{\quad}$$



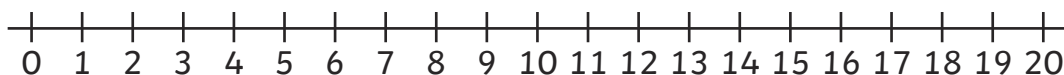
$$7 + 9 = \underline{\quad}$$



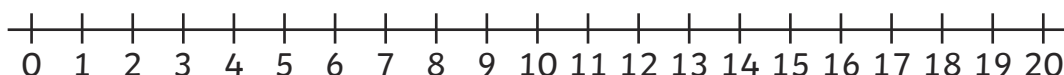
$$9 + 10 = \underline{\quad}$$



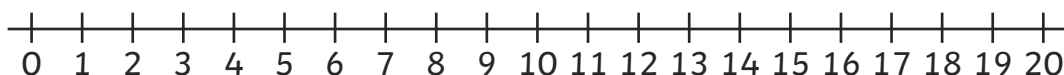
$$10 + \underline{\quad} = 20$$



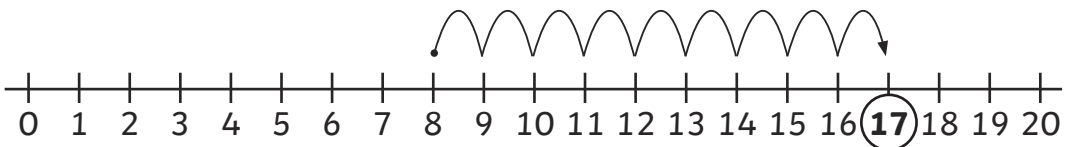
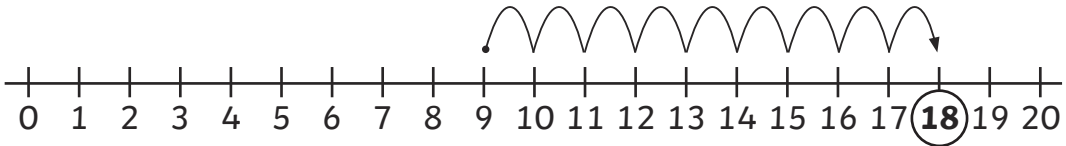
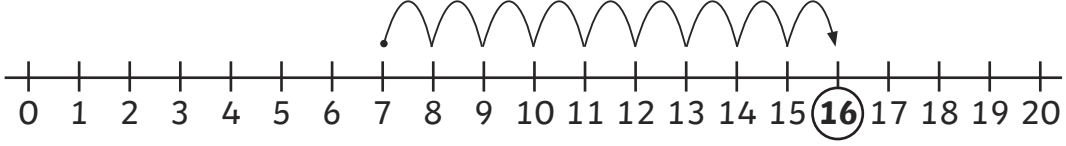
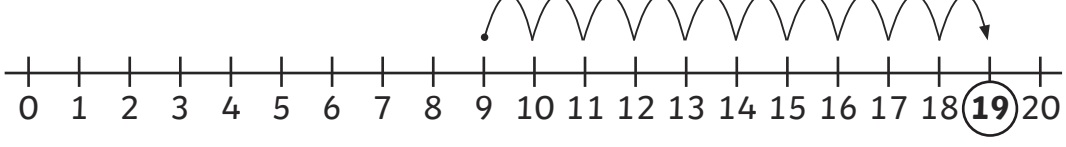
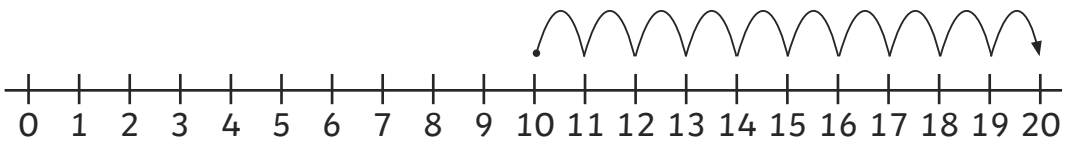
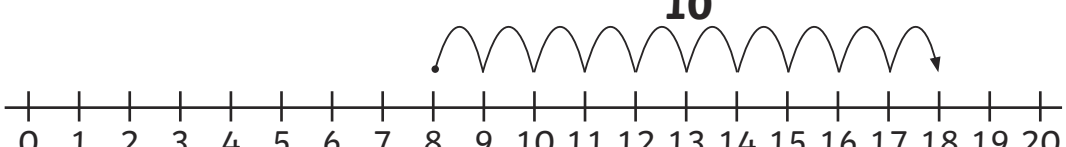
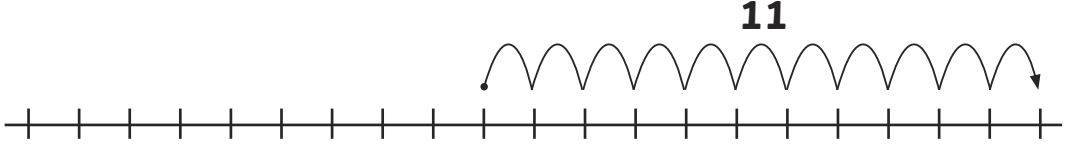
$$8 + \underline{\quad} = 18$$



$$\underline{\quad} + 9 = 19$$



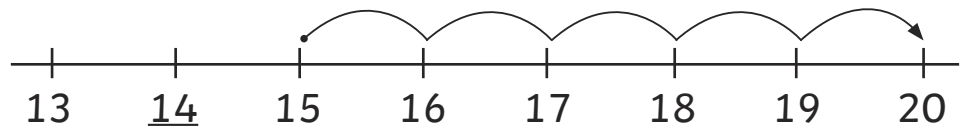
Addition within 20 with a Number Line **Answers**

$8 + 9 = \underline{17}$	 <p>A number line from 0 to 20 with tick marks every 1 unit. Starting at 8, there are 9 jumps of 1 unit each, ending at 17. The number 17 is circled.</p>
$9 + 9 = \underline{18}$	 <p>A number line from 0 to 20 with tick marks every 1 unit. Starting at 9, there are 9 jumps of 1 unit each, ending at 18. The number 18 is circled.</p>
$7 + 9 = \underline{16}$	 <p>A number line from 0 to 20 with tick marks every 1 unit. Starting at 7, there are 9 jumps of 1 unit each, ending at 16. The number 16 is circled.</p>
$9 + 10 = \underline{19}$	 <p>A number line from 0 to 20 with tick marks every 1 unit. Starting at 9, there are 10 jumps of 1 unit each, ending at 19. The number 19 is circled.</p>
$10 + \underline{10} = 20$	 <p>A number line from 0 to 20 with tick marks every 1 unit. Starting at 10, there are 10 jumps of 1 unit each, ending at 20. The number 10 is written above the line.</p>
$8 + \underline{10} = 18$	 <p>A number line from 0 to 20 with tick marks every 1 unit. Starting at 8, there are 10 jumps of 1 unit each, ending at 18. The number 10 is written above the line.</p>
$\underline{11} + 9 = 20$	 <p>A number line from 0 to 20 with tick marks every 1 unit. Starting at 11, there are 9 jumps of 1 unit each, ending at 20. The number 11 is written above the line.</p>

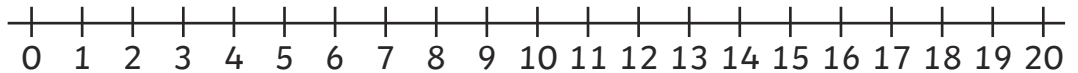
Addition within 20 with a Number Line

Example:

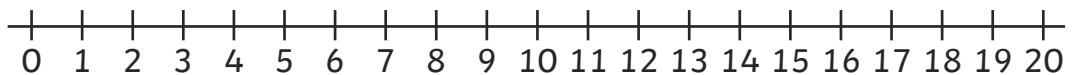
$$\underline{14} + 5 = \textcircled{19}$$



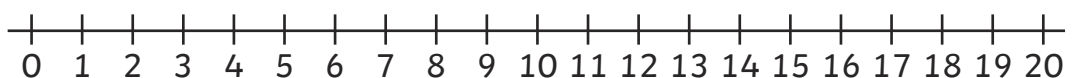
$$3 + 4 + 5 = \underline{\quad}$$



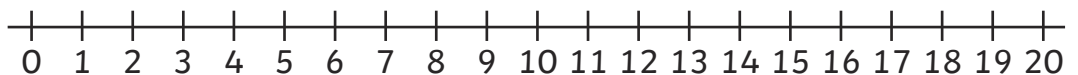
$$4 + 5 + 6 = \underline{\quad}$$



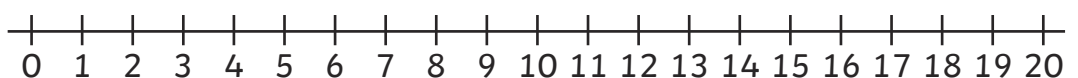
$$6 + 5 + 6 = \underline{\quad}$$



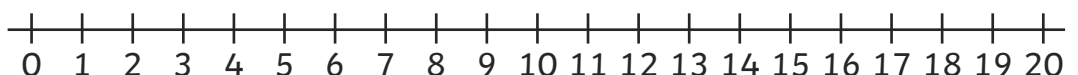
$$6 + 6 + 7 = \underline{\quad}$$



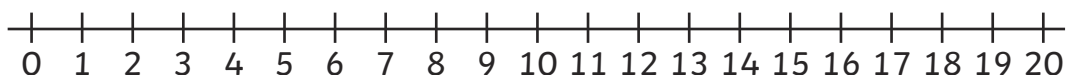
$$8 + 4 + \underline{\quad} = 18$$



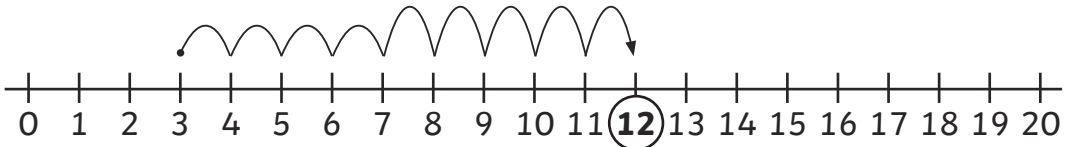
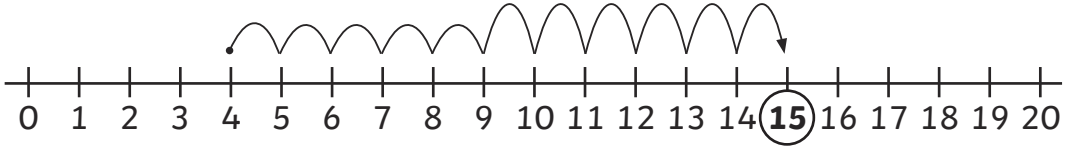
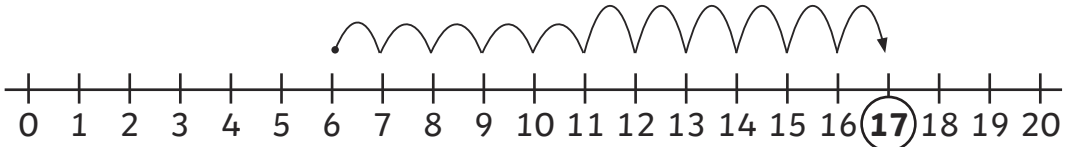
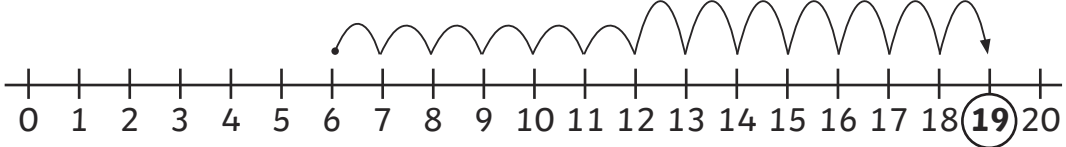
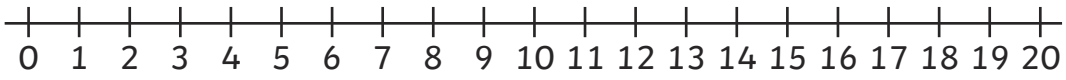
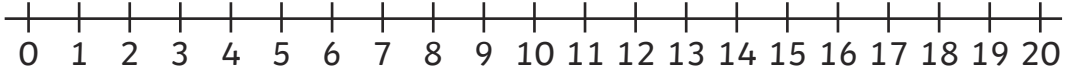
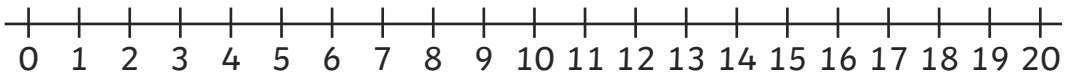
$$\underline{\quad} + 3 + 8 = 18$$



$$9 + \underline{\quad} + 5 = 19$$



Addition within 20 with a Number Line **Answers**

$3 + 4 + 5 = \underline{12}$	 <p>A number line from 0 to 20 with tick marks every 1 unit. A starting point is marked at 3. Three jumps are shown: a jump of 3 units to 6, a jump of 4 units to 10, and a jump of 5 units to 15. The final result, 12, is circled.</p>
$4 + 5 + 6 = \underline{15}$	 <p>A number line from 0 to 20 with tick marks every 1 unit. A starting point is marked at 4. Three jumps are shown: a jump of 4 units to 8, a jump of 5 units to 13, and a jump of 6 units to 19. The final result, 15, is circled.</p>
$6 + 5 + 6 = \underline{17}$	 <p>A number line from 0 to 20 with tick marks every 1 unit. A starting point is marked at 6. Three jumps are shown: a jump of 6 units to 12, a jump of 5 units to 17, and a jump of 6 units to 23. The final result, 17, is circled.</p>
$6 + 6 + 7 = \underline{19}$	 <p>A number line from 0 to 20 with tick marks every 1 unit. A starting point is marked at 6. Three jumps are shown: a jump of 6 units to 12, a jump of 6 units to 18, and a jump of 7 units to 25. The final result, 19, is circled.</p>
$8 + 4 + \underline{6} = 18$	<p>Answer could be worked out in different ways.</p>  <p>A blank number line from 0 to 20 with tick marks every 1 unit.</p>
$\underline{7} + 3 + 8 = 18$	<p>Answer could be worked out in different ways.</p>  <p>A blank number line from 0 to 20 with tick marks every 1 unit.</p>
$9 + \underline{5} + 5 = 19$	<p>Answer could be worked out in different ways.</p>  <p>A blank number line from 0 to 20 with tick marks every 1 unit.</p>