










S2 MATHS WORK

25/05/20 – 01/06/20



You can do as many of these tasks as you like but you do not need to complete them all. You must complete the worksheet section.

<p>LI: use number lines to <i>calculate</i> elapsed time.</p>	<p>LI: I can write time using the 12 and 24 hour clock.</p>	<p>LI: I can solve problems about the duration of events.</p>
<p>Watch</p> <p>Watch the video about calculating time intervals! Click on the link below.</p> 	<p>MyMaths</p> <p>Complete tasks set on MyMaths</p> <p>Task 1: Time Between</p> <p>Task 2: Time 2</p> 	<p>Worksheet</p> <p>Complete and submit through Teams Assignments. The worksheets are available on teams!</p> <p>Duration of time problems.</p> <div style="display: flex; justify-content: space-around; align-items: center;"> <div style="text-align: center;">  <p>Silver</p> </div> <div style="text-align: center;">  <p>Gold</p> </div> </div> <p>Choose which level you want to do.</p>
<p>Puzzle</p> <p>Ben, Tara and Liam are playing hide and seek. They start playing at quarter past 11. They play for 45 minutes, before stopping for a drink and a biscuit. They continue to play for another 45 minutes and head inside at 10 minutes past 1.</p> <p>How long did they stop for a drink and a biscuit? Explain your reasoning.</p>  <p>Send your answer to your teacher!</p>	<p>Create</p> <p>Can you complete this interactive scheduling task?</p> <p>Click on the calendar link below!</p> 	<p>Quiz</p> <p>Try the following quiz (click on the link)</p> <p>Good luck!</p> 

--	--	--