

Logarithms

1. Simplify

(a) $\log_4 2 + \log_4 8$

(b) $\log_3 108 - \log_3 4$

(c) $\log_5 50 + \log_5 2 - \log_5 4$

(d) $\log_9 3 - \log_9 6 + \log_9 18$

(e) $\log_4 10 + 3\log_4 2 - \frac{1}{2}\log_4 25$

(f) $\frac{3}{4}\log_{10} 16 - \frac{2}{3}\log_{10} 8 + \log_{10} 5$

2. Solve for $x > 0$

(a) $\log_a 5 + \log_a 2x = \log_a 60$

(b) $2\log_a 3 + \log_a x = \log_a 36$

(c) $3\log_4 2 + \log_4 x = 1$

(d) $\frac{1}{2}\log_3 16 + 2\log_3 x = 2$

(e) $\log_a x + \log_a (x + 1) = \log_a 2$

(f) $\log_a x + \log_a (x + 4) = \log_a 12$

(g) $\log_2 x + \log_2 (x - 3) = 2$

(h) $\log_5 (x + 3) + \log_5 (x - 1) = 1$

(i) $\log_3 6x - \log_3 (x - 2) = 2$

(j) $2\log_2 x - \log_2 (x - 1) = 2$

3. Find x in each of the following ($x > 0$)

(a) $4\log_x 6 - 2\log_x 4 = 1$

(b) $2\log_x 3 + \log_x 4 = 2$

(c) $\frac{1}{2}\log_x 64 + 2\log_x 2 = 5$

(d) $2\log_x 6 - \frac{2}{3}\log_x 8 = 2$

(e) $3\log_x 4 - 2\log_x 2 = 2$

(f) $\frac{3}{4}\log_x 81 - \frac{1}{2}\log_x 64 = 3$

4. Given $\frac{1}{2}\log_a y = \log_a (x - 1) + 2\log_a 3$, show that $y = 81(x - 1)^2$.

5. Given $2\log_m n = \log_m 16 + 1$, show that $n = 4\sqrt{m}$

6. Given $3\log_a y = 2\log_a (x - 1) + 6\log_a 2$, show that $y = 4\sqrt[3]{(x - 1)^2}$

7. Find where the following curves cut the x-axis.

(a) $y = \log_4 x - 2$

(b) $y = \log_2 (x - 4) - 1$

(c) $y = \log_3 (x + 1) - 2$

(d) $y = \log_2 (x - 2) - 4$

8. Find where the following curves cut the y-axis.

(a) $y = \log_2 (x + 4) + 1$

(b) $y = \log_3 (x + 27) + 5$

(c) $y = -\log_4 (x + 16) - 2$

9. The number of bacteria present in a beaker, during an experiment can be measured using the formula $N(t) = 30e^{1.25t}$ where t is the number of hours passed.
- How many bacteria are in the beaker at the start of the experiment?
 - Calculate the number of bacteria present after 5 hours.
 - How long will it take for the number of bacteria present to treble?
10. The mass, M grams, of a radioactive isotope after a time of t years, is given by the formula $M = M_0 e^{-kt}$ where M_0 is the initial mass of the isotope.
- In 5 years a mass of 10 grams of the isotope is reduced to 8 grams.
- Calculate k .
 - Calculate the half-life of the substance i.e. the time taken for half the substance to decay.
11. A cup of coffee cools according to the law $P_t = P_0 e^{-kt}$, where P_0 is the initial temperature of the coffee and P_t is the temperature after t minutes.
- A cup of coffee cools from 80°C to 60°C in a time of 15 minutes. Calculate k .
 - By how many degrees will the cup of coffee cool in the next 15 minutes?
12. A fire spreads according to the law $A = A_0 e^{kt}$ where A_0 is the area covered by the fire when it is first measured and A is the area covered after t hours.
- If it takes $1\frac{1}{2}$ hours for the fire to double in area, find k .
 - A bush fire covers an area of 800 km^2 . If not tackled, calculate the area the fire will cover 4 hours later.
13. The value, V (£million), of a container ship is given by the formula $V = 120e^{-0.065t}$ where t is the number of years after the ship is launched.
- Calculate the value of the ship when it was launched.
 - Calculate the percentage reduction in value of the ship after 6 years.
14. A cell culture grows at a rate given by the formula $y(t) = Ae^{kt}$ where A is the initial number of cells and $y(t)$ is the number of cells after t hours.
- It takes 24 hours for 500 cells to increase in number to 800. Find k .
 - Calculate the time taken for the number of cells to double.

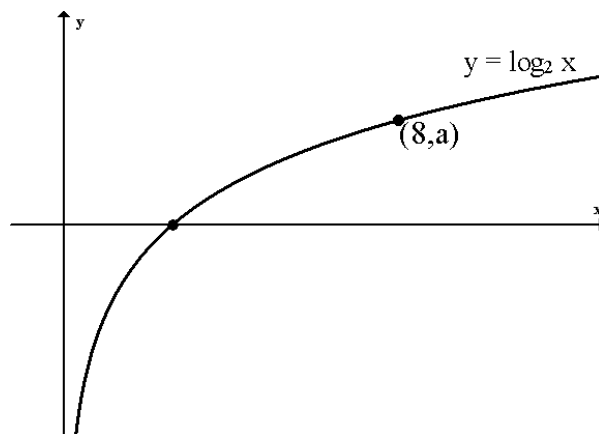
15. Dangerous blue algae are spreading over the surface of a lake according to the formula $A_t = A_0 e^{kt}$ where A_0 is the initial area covered by the algae and A_t is the area covered after t days.

When first noticed the algae covered an area of 200 square metres. One week later the algae covered an area of 320 square metres.

- Calculate the value of k .
- Calculate, to the nearest day, how long it will take for the area of algae to increase by a further 500 square metres.

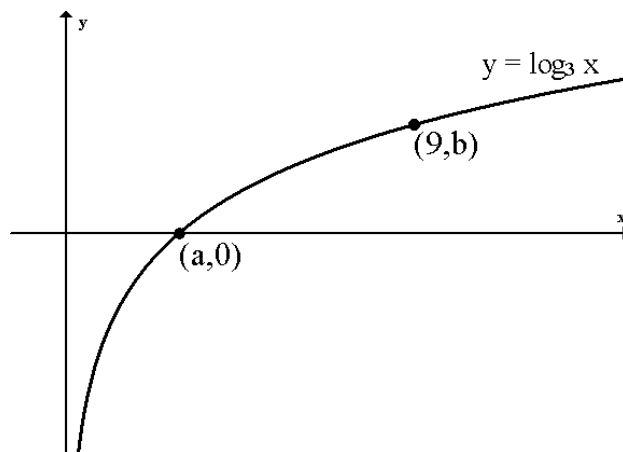
16. The diagram opposite shows the graph of $y = \log_2 x$.

- Find the value of a .
- Sketch the graph of $y = \log_2 x - 3$
- Sketch the graph of $y = \log_2 4x$



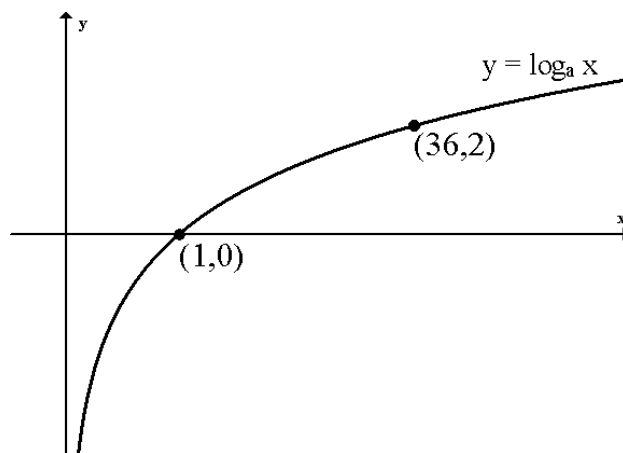
17. The diagram opposite shows the graph of $y = \log_3 x$.

- Find a and b .
- Sketch the graph of $y = \log_3 27x$
- Sketch the graph of $y = \log_3 \frac{1}{x}$



18. The diagram shows the graph of $y = \log_a x$

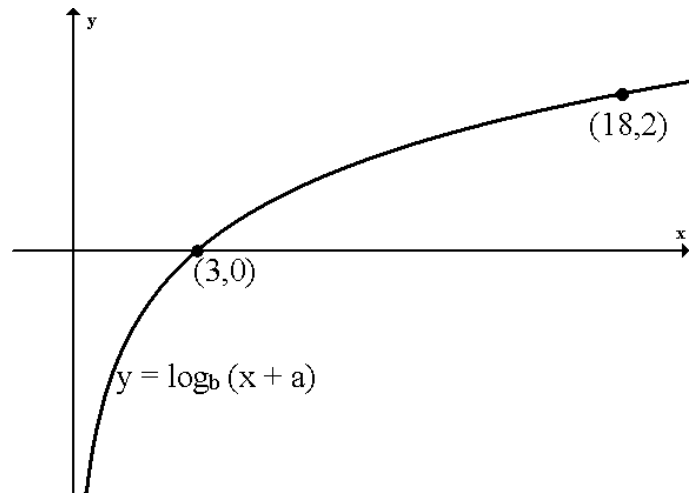
- Determine the value of a .
- Draw the graph of $y = \log_a 6x^2$ when a takes this value.



19. The diagram opposite shows the graph of $y = \log_b(x + a)$

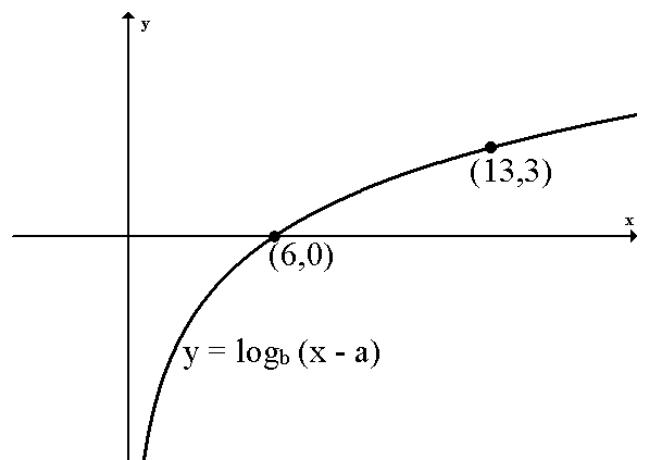
(a) Find the value of a .

(b) Find the value of b .



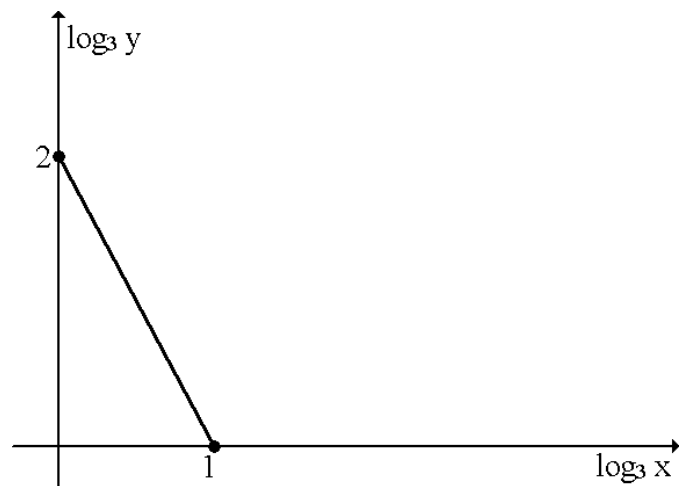
20. The diagram shows the graph of $y = \log_b(x - a)$.

Find a and b .



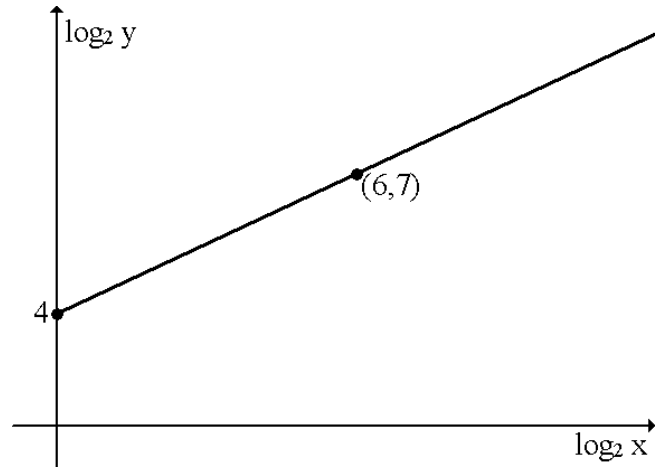
21. The graph opposite illustrates the law $y = kx^n$.

Find the values of k and n .



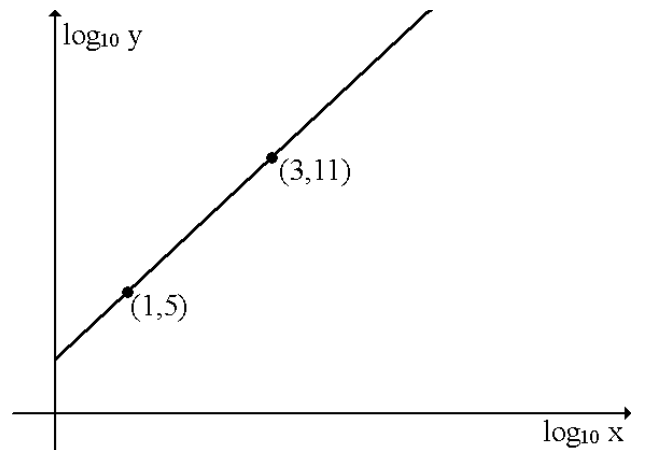
22. The graph opposite illustrates the law $y = kx^n$.

Find the values of k and n .



23. The graph opposite illustrates the law $y = kx^n$.

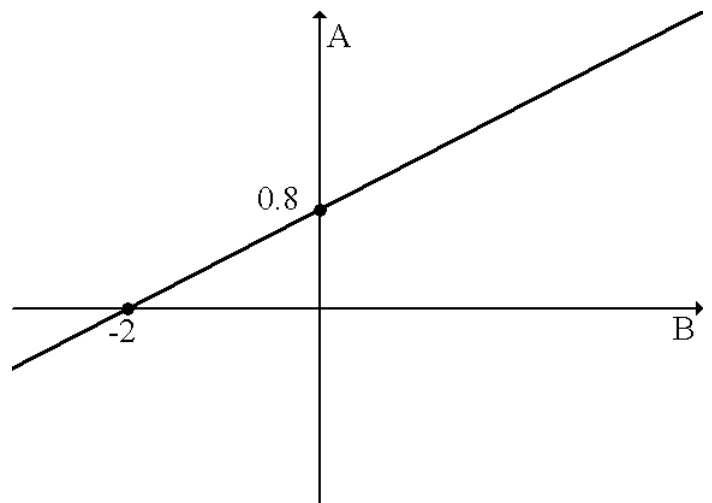
Find the values of k and n .



24. The graph opposite shows the results of an experiment.

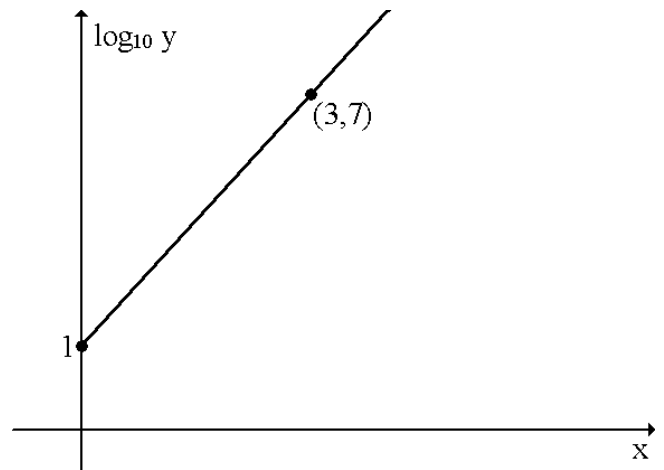
(a) Write down the equation of the line in terms of A and B .

(b) Given $A = \log_e a$ and $B = \log_e b$, show that a and b satisfy a relationship of the form $a = kb^n$ and state the values of k and n .



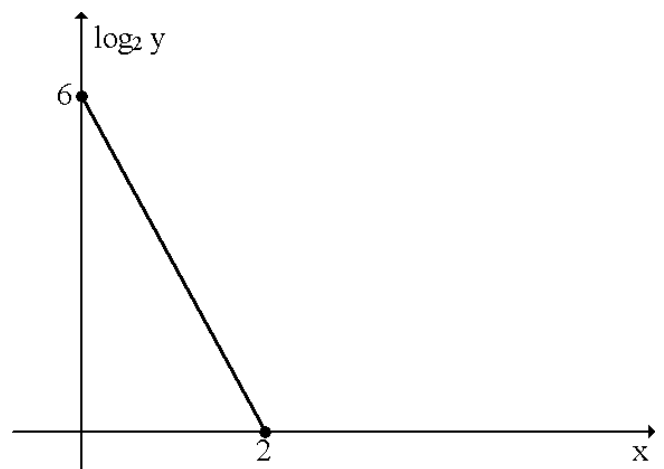
25. The graph opposite illustrates the law $y = ab^x$.

Find the values of a and b .



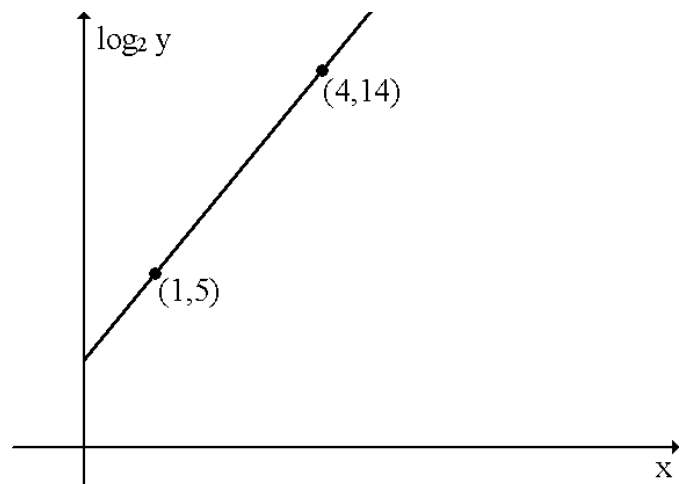
26. The graph opposite illustrates the law $y = ab^x$.

Find the values of a and b .



27. The graph opposite illustrates the law $y = ab^x$.

Find the values of a and b .



28. Given $\log \frac{1}{2} (a + b) = \frac{1}{2} (\log a + \log b)$, show that $(a + b)^2 = 4ab$.

29. $\log_x a + \log_x b = u$ and $\log_x a - \log_x b = w$. Show that $a = x^{\frac{1}{2}(u+w)}$

30. If $\log_a p = \cos^2 x$ and $\log_a r = \sin^2 x$, show that $pr = a$.